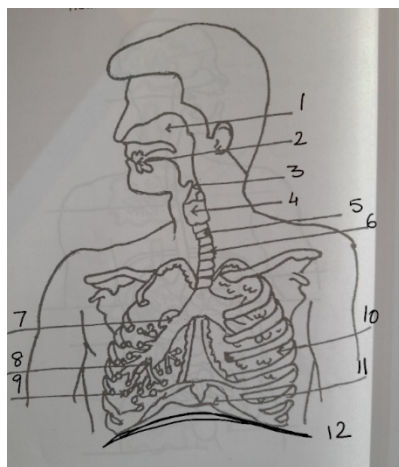
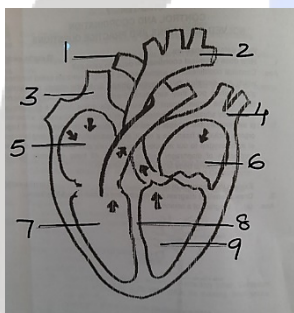


1. Study the given diagram -



Name 1, 6, 7, 12.

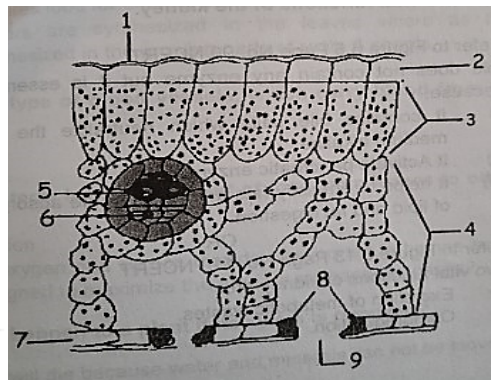
2. Look at the diagram of heart.



Name 1, 2, 3, 5, 6, 7, 8, 9.

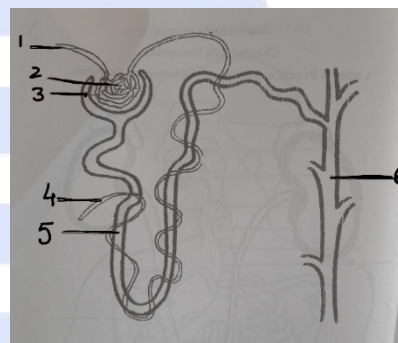
Write which kind of blood is contained/ carried by 2, 5, 6, 7, (oxygenated or deoxygenated blood).

3. Study the given diagram carefully



- what do the black dots represent
- identify and name in the diagram, the following structures: 1, 2, 3, 4, 5, 6 and 7, 8, 9

4. Study the given diagram.



- identify the structure
- name the parts labelled 1, 2, 3, 5, 6
- what is the advantage of the long tubular part
- what substance is/are carried by 1 and 6.